

**PERIODIC TEST – I (2022-2023)**

Name: \_\_\_\_\_

Grade: II

Subject: Maths

Date: 11-7-2022

Time: 1 ½ Hr

**Marks  
obtained:**

**Total:20**

**I. Write whether the following is true or false. (5X1=5)**

1. Shapes which are made up of straight lines have corners. \_\_\_\_\_
2. A triangle has four sides. \_\_\_\_\_
3. A sphere has only curved face. \_\_\_\_\_
4. All the faces of a cube are same. \_\_\_\_\_
5. A cuboid has four flat faces. \_\_\_\_\_

**II. Identify the shapes and write the name using helpbox (4X1=4)**

Cube


Cuboid

Cone


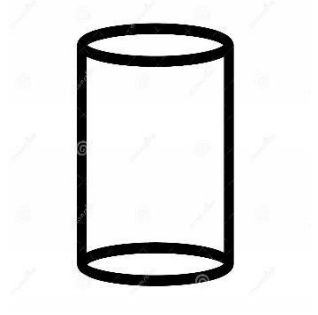
Cylinder

Sphere

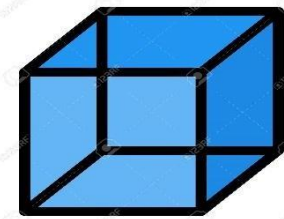
6.



7.



8.



9.




**III. Trace the horizontal line with blue, vertical line with red and slanting line with green colour in the given alphabets. (4X1=4)**


10



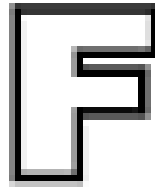
11



12


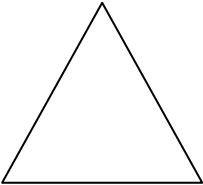



13



IV. Write the number of corners and sides for the given shapes.

(3X1=3)

Shape	Sides	Corners
14 		
15 		
16 		

**V. Draw any picture of your choice using only horizontal, vertical and slanting lines.**

**(1X4=4)**